
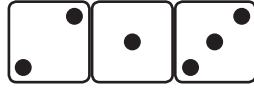


ЗБИР ТРИ БРОЈА

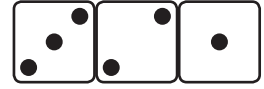
1. Посматрај слике и записуј збирове



$$1 + 3 + 2$$



$$\underline{\quad} + \underline{\quad} + \underline{\quad}$$



$$\underline{\quad} + \underline{\quad} + \underline{\quad}$$

2. Записуј збирове и рачунај:



$$\underline{\quad} + \underline{\quad} + \underline{\quad} = \underline{\quad} + \underline{\quad} = \underline{\quad}$$



$$\underline{\quad} + \underline{\quad} + \underline{\quad} = \underline{\quad} + \underline{\quad} = \underline{\quad}$$



$$\underline{\quad} + \underline{\quad} + \underline{\quad} = \underline{\quad} + \underline{\quad} = \underline{\quad}$$



$$\underline{\quad} + \underline{\quad} + \underline{\quad} = \underline{\quad} + \underline{\quad} = \underline{\quad}$$

3. Израчунај:

$$4 + 2 + 1 = \underline{\quad} + \underline{\quad} = \underline{\quad}$$

$$2 + 3 + 1 = \underline{\quad} + \underline{\quad} = \underline{\quad}$$

$$5 + 3 + 1 = \underline{\quad} + \underline{\quad} = \underline{\quad}$$

$$2 + 2 + 3 = \underline{\quad} + \underline{\quad} = \underline{\quad}$$

ЗБИР ТРИ БРОЈА

1. Рачунај поступно.

$$3 + 4 + 2 = 7 + 2 = \underline{\quad}$$

$$2 + 1 + 3 = \underline{\quad}$$

$$5 + 3 + 2 = \underline{\quad} + \underline{\quad} = \underline{\quad}$$

$$4 + 2 + 3 = \underline{\quad}$$

$$4 + 4 + 0 = \underline{\quad} + \underline{\quad} = \underline{\quad}$$

$$5 + 1 + 4 = \underline{\quad}$$

$$3 + 0 + 5 = \underline{\quad} + \underline{\quad} = \underline{\quad}$$

$$3 + 2 + 5 = \underline{\quad}$$

2. Нена има 3 шналице, Сања 4, а Јована две. Колико шналица имају заједно?
